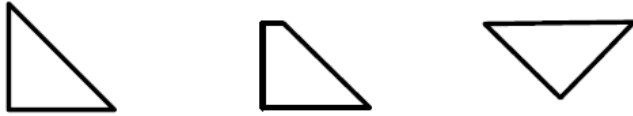


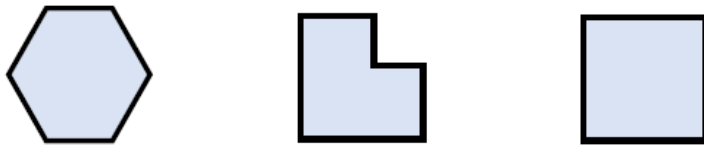
# Year 3 Spring 2 Week 1 Maths Task 1 - Properties of 2d shapes

## Consolidate

### Odd one out



### Odd one out



## Core

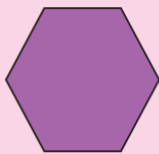
Complete the sentences.



This is a pentagon.

It has  sides.

It has 5 vertices.

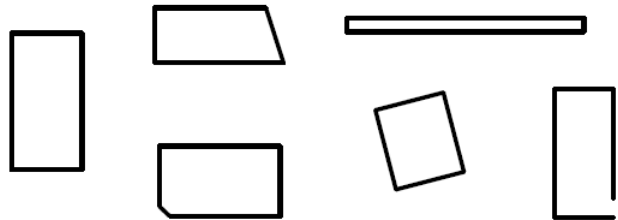


This is a \_\_\_\_\_

It has  sides.

It has  vertices.

Is it a rectangle? ✓ x



Is it a pentagon? ✓ x



## Extend

### Read the pictures

<input type="text"/> 1	square	
<input type="text"/>	rectangles	
<input type="text"/>	triangles	

<input type="text"/>	squares	
<input type="text"/>	rectangles	
<input type="text"/>	triangles	