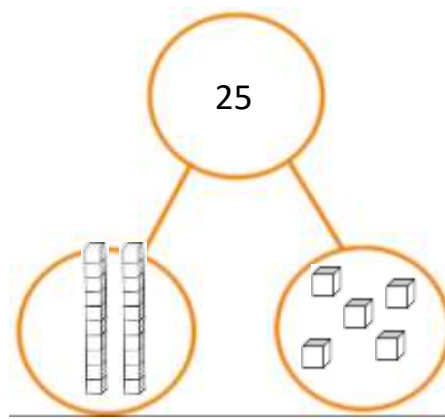


My number is _____.

It has _____ tens

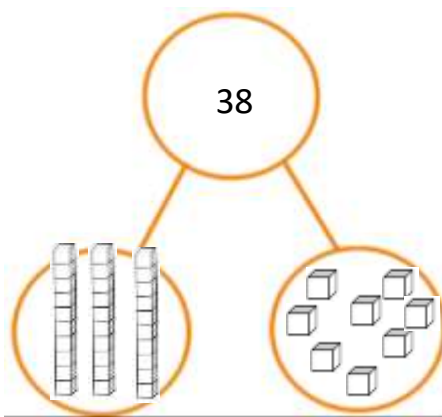
and _____ ones.



My number is _____.

It has _____ tens

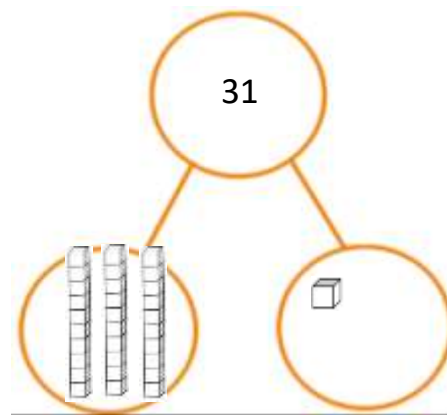
and _____ ones.



My number is _____.

It has _____ tens

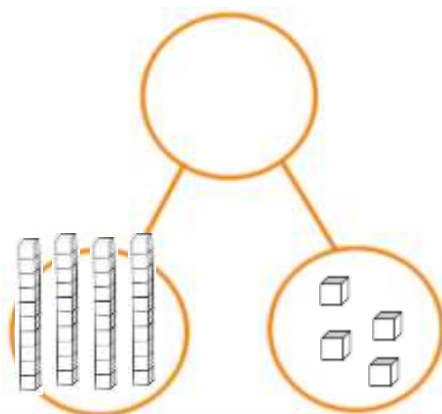
and _____ ones.



My number is _____.

It has _____ tens

and _____ ones.



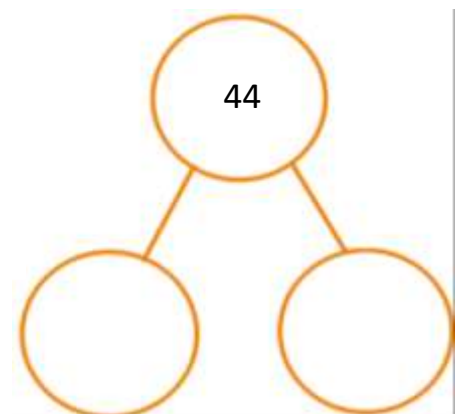
My number is _____.

It has _____ tens

and _____ ones.

Wb 22.2.21

Can I understand what each digit represents in numbers to 20 and show these numbers with resources?



My number is _____.

It has _____ tens

and _____ ones.