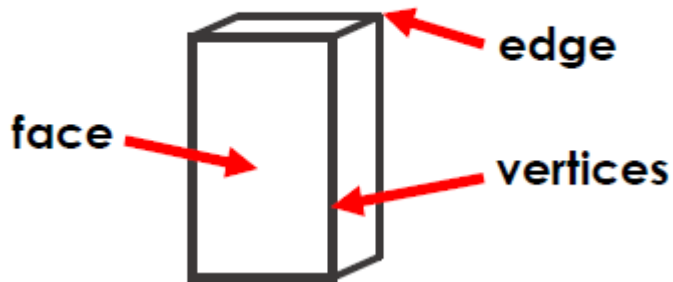


# Year 3 Spring 2 Week 1 Maths Task 3 - 2d shapes on the surface of 3d shapes

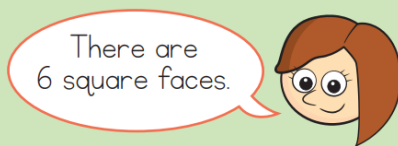
## Consolidate

### True or false? ✓ x




## Core

Rosie is holding a 3D shape.  
She is counting the number of 2D faces.



What shape is Rosie holding?

### Fill the gaps



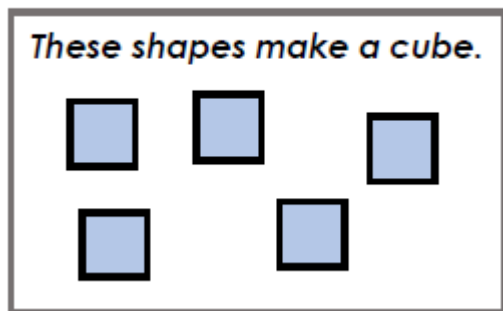
A cuboid is has:

- square faces
- rectangular faces

## Extend

### Spot the mistakes

#### Mistake 1:



#### Mistake 2:

